



Third Grade

Happy Summer!

Your child has worked hard this year! In an effort to maintain skills and encourage growth, we have included a few required summer reading/math activities. Reading for just 20 minutes each day at home can have a positive impact on your child's reading success in school!

Please find the following required summer math/reading activities attached:

- Math calendars for June, July and August
- Reading lists for both fiction and nonfiction (Please choose 1 fiction book and 1 non-fiction book.)
- 5 Fingers of Facts graphic organizer to be used with the non-fiction book.
- Chomp into a Good Book graphic organizer to be used with the fiction book.
- Read at least 1 additional free choice book and write a paragraph describing why you liked or disliked the book. Remember, you may always read more!

We encourage you to log onto www.freckle.com for additional math and reading enrichment activities. Class name: Mrs. Dewar/Mrs. Scheffler Summer 2021
Class Code is TJJPAV

Non-Fiction (any in series)





- *Who Was...?* published by Grosset & Dunlap
- *Magic Tree House Fact Trackers* by Mary Pope Osbourne
- *Weird But True* published by National Geographic Kids


Fiction (any in series)

- *A to Z Mysteries* by Ron Roy
- *Magic Treehouse Series* by Mary Pope Osbourne
- *Ramona* by Beverly Cleary
- *Nate the Great* by Marjorie Weinman Sharmat




Have a great summer!
Mrs. Dewar & Mrs. Scheffler

JULY Problem of the Day

SUNDAY	MONDAY	TUESDAY	WEDNESDAY	THURSDAY	FRIDAY	SATURDAY
 <p>You have 2 apples and 2 oranges. How many pieces of fruit do you have?</p> <input type="text"/>	 <p>What is the value of the ones place in 75?</p> <input type="text"/>	 <p>What number is 4 more than 2?</p> <input type="text"/>	<p>35 - 28 =</p> <input type="text"/>	<p>100 - 99 =</p> <input type="text"/>	<p>Ben has 64 LEGOs. Tom has 62. How many more does Ben have?</p> <input type="text"/>	<p>Complete the sequence: 12, 9, 6, ---</p> <input type="text"/>
<p>What hour is shown on the clock:</p>  <input type="text"/>	<p>How much more is 16 than 4?</p> <input type="text"/>	<p>3 + 4 + 6 =</p> <input type="text"/>	<p>24 - 10 =</p> <input type="text"/>	<p>3 groups of 5 is equal to:</p> <input type="text"/>	<p>There are 18 birds in the yard. 9 are in the nest and the rest are flying. How many are flying?</p> <input type="text"/>	<p>Complete the sequence: 40, 30, 20, ---</p> <input type="text"/>
<p>10 less than 28 is equal to:</p> <input type="text"/>	<p>A shelter had 25 dogs but 6 were adopted. How many dogs remain?</p> <input type="text"/>	<p>What is the value of 2 tens?</p> <input type="text"/>	<p>What is the difference between 28 and 7?</p> <input type="text"/>	<p>17 + 5 =</p> <input type="text"/>	<p>7 less than 30 is equal to:</p> <input type="text"/>	<p>3 sisters each have 8 pieces of candy. How many do they have total?</p> <input type="text"/>
<p>Find the difference between 75 and 50.</p> <input type="text"/>	<p>18 + 8 =</p> <input type="text"/>	<p>Ann spent 7 minutes putting on sunscreen and 20 minutes swimming. How long did she spend total?</p> <input type="text"/>	<p>10 red crayons, 10 blue crayons & 8 green crayons equals how many crayons?</p> <input type="text"/>	<p>What is the value of 1 quarter and 4 pennies?</p> <input type="text"/>	<p>12 + 10 + 8 =</p> <input type="text"/>	<p>8 less than 39 is equal to:</p> <input type="text"/>





August Problem of the Day

SUNDAY	MONDAY	TUESDAY	WEDNESDAY	THURSDAY	FRIDAY	SATURDAY
What number is 10 less than 11? <input type="text"/>	$54 - 52 =$ <input type="text"/>	Complete the sequence: 12, 9, 6, ... <input type="text"/>	There are 12 apples in the yard, 8 are in the tree. How many are on the ground? <input type="text"/>	What is the value of a nickel? <input type="text"/>	$20 - 14 =$ <input type="text"/>	What number is greater, 7 or 5? <input type="text"/>
What number is in the hundreds place: 1,864 <input type="text"/>	How many tens are in 392? <input type="text"/>	$6 + 4 =$ <input type="text"/>	Find the difference between 26 and 15. <input type="text"/>	$4 + 4 + 4 =$ <input type="text"/>	What is the value of 2 nickels and 3 pennies? <input type="text"/>	Sam picked 9 flowers and Sara picked 5. How many do they have total? <input type="text"/>
How many minutes are in a quarter hour? <input type="text"/>	Find the missing number: $6 + ? = 22$ <input type="text"/>	$37 - 20 =$ <input type="text"/>	Complete the sequence: 12, 14, 16, ... <input type="text"/>	Tom has 12 pears and 7 apples. How many pieces of fruit does he have? <input type="text"/>	How many minutes are shown on the clock:  <input type="text"/>	What is the difference between 25 and 4? <input type="text"/>
$11 + 11 =$ <input type="text"/>	Complete the sequence: 17, 19, 21, ... <input type="text"/>	Doubling 12 is equal to: <input type="text"/>	2 less than 27 is equal to: <input type="text"/>	Which is less, 36 or 26? <input type="text"/>	5 more than 22 is equal to: <input type="text"/>	$18 + 10 =$ <input type="text"/>
Beth had 5 cookies left so she made 2 dozen more. How many does she have now? <input type="text"/>	What is the value of the 3 in 936? <input type="text"/>	Find the sum of 18 and 13. <input type="text"/>	© MathGeekMama.com			



June Problem of the Day



SUNDAY	MONDAY	TUESDAY	WEDNESDAY	THURSDAY	FRIDAY	SATURDAY
 <p>What number is in the hundreds place: 637</p> <input type="text"/>	<p>There are 8 bird eggs. 2 have hatched. How many have not?</p> <input type="text"/>	<p>Sam has 12 cars and Jon has 11. How many more does Sam have?</p> <input type="text"/>	<p>What number is less, 2 or 10?</p> <input type="text"/>	<p>What number is 10 less than 13?</p> <input type="text"/>	<p>Lily and Ben have 8 apple slices. How many can they each eat if they share equally?</p> <input type="text"/>	<p>Complete the sequence: 20, 15, 10, ---</p> <input type="text"/>
<p>8 more than 5 is equal to:</p> <input type="text"/>	<p>One nest has 6 eggs and another 8. How many are there altogether?</p> <input type="text"/>	<p>What number is 1 less than $8 + 8$?</p> <input type="text"/>	<p>Find the missing number: $8 + ? = 17$</p> <input type="text"/>	<p>What is the value of the 1 in 415?</p> <input type="text"/>	<p>Ben had 20 candies but ate 9. How many are left?</p> <input type="text"/>	<p>19 - 7 =</p> <input type="text"/>
<p>There are 2 soccer teams with 10 kids each. How many kids play soccer?</p> <input type="text"/>	<p>$7 + 7 + 7 =$</p> <input type="text"/>	<p>What number is greater, 18 or 22?</p> <input type="text"/>	<p>Find the sum of 2, 8 and 6.</p> <input type="text"/>	<p>2 more than 15 is equal to:</p> <input type="text"/>	<p>Complete the sequence: 9, 12, 15, ---</p> <input type="text"/>	<p>You have 12 chickens and your neighbor has 7. How many do you have total?</p> <input type="text"/>
<p>2 tens and 7 ones is equal to:</p> <input type="text"/>	<p>2 more than 26 is equal to:</p> <input type="text"/>	<p>$30 - 1 =$</p> <input type="text"/>	<p>Ben, Ann and Tom each caught 10 fish. How many did they catch in all?</p> <input type="text"/>	<p>Find the total of 3 groups of 8:</p>  <input type="text"/>	<p>What is the value of a quarter?</p> <input type="text"/>	<p>What number is double 13?</p> <input type="text"/>